

Name: _____

Comparing Money

Write the amount shown by each set of coins.
Then, compare the sets of coins using the symbols: $<$, $>$, or $=$.



Compare: $<$, $>$, or $=$




amount: _____

amount: _____



Compare: $<$, $>$, or $=$



amount: _____

amount: _____



Compare: $<$, $>$, or $=$



amount: _____

amount: _____



Compare: $<$, $>$, or $=$



amount: _____

amount: _____

ANSWER KEY


Comparing Money

Write the amount shown by each set of coins.

Then, compare the sets of coins using the symbols: $<$, $>$, or $=$.



Compare: $<$, $>$, or $=$




amount: 61¢



amount: 70¢



Compare: $<$, $>$, or $=$




amount: 45¢



amount: 45¢



Compare: $<$, $>$, or $=$




amount: 15¢



amount: 8¢



Compare: $<$, $>$, or $=$



amount: 56¢



amount: 50¢