









Entrée	Sides	Drinks
 <p>Chicken nugget \$4.39</p>	 <p>Fries \$2.19</p>	 <p>Soda \$1.65</p>
 <p>Sandwich \$5.35</p>	 <p>Small Salad \$3.69</p>	 <p>Iced Tea \$1.25</p>
 <p>Salad \$8.99</p>		 <p>Lemonade \$1.80</p>

Using the menu above find the total for each meal.

$$\begin{array}{ccccccc}
 \text{[Chicken nugget]} & + & \text{[Fries]} & + & \text{[Lemonade]} & = & \underline{\hspace{2cm}} \\
 \underline{\hspace{2cm}} & + & \underline{\hspace{2cm}} & + & \underline{\hspace{2cm}} & = & \underline{\hspace{2cm}}
 \end{array}$$

$$\begin{array}{ccc}
 \text{[Salad]} & + & \text{[Iced Tea]} & = & \underline{\hspace{2cm}} \\
 \underline{\hspace{2cm}} & + & \underline{\hspace{2cm}} & = & \underline{\hspace{2cm}}
 \end{array}$$

$$\begin{array}{ccccccc}
 \text{[Sandwich]} & + & \text{[Small Salad]} & + & \text{[Soda]} & = & \underline{\hspace{2cm}} \\
 \underline{\hspace{2cm}} & + & \underline{\hspace{2cm}} & + & \underline{\hspace{2cm}} & = & \underline{\hspace{2cm}}
 \end{array}$$