

### Time to the Nearest 5 Minutes

Write the time that is shown on the clock.

1.




2.



3.




4.



5.



6.



7.



8.




9.



10.



11.



12.




13.



14.



15.



16.



17.



18.

