

Name: _____

Date: _____

Telling Time


Draw the hands on the clock to show the time.

1.




7:00

2.



9:45

3.




2:55

4.



4:35

5.



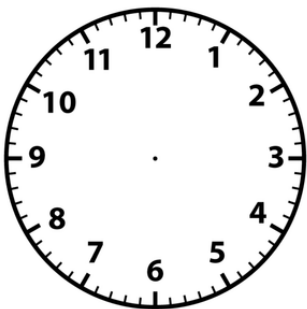
3:30

6.




11:40

7.




2:15

8.



10:45

9.



1:10